

Lincoln Park Elementary School

274 Pine Brook Road • Lincoln Park • New Jersey 07035
Telephone (973) 696-5530 • Fax (973) 696-5321



Mrs. Melissa N. Flach-Bammer
Principal

Mrs. Jaclyn Hefler
School Counselor

June, 2019

Dear Parents and Guardians,

Summer is almost here! This year we have not only organized our summer reading activities for each grade level, but we have organized summer math activities as well. We look forward to working together with you to encourage your children's academic success.

A reminder that these summer reading and math assignments are **required**. If you have any questions about your child's summer assignments, please feel free to contact his/her teacher or me. In addition to the hard copies we are sending home, all summer assignments can be downloaded from the links on the LPES homepage after June 21st (<http://www.lincolnparkboe.org/3/Home>).

- **Students entering kindergarten:**
 - Students entering kindergarten are encouraged to read and engage in appropriate math activities with their parents. No formal projects are required.
- **Students entering first grade:**
 - Reading: Please complete the "Super Story Elements" worksheet.
 - Math: Please complete the math packet.
- **Students entering second grade:**
 - Reading: Please complete the "Super Story Elements" worksheet.
 - Math: Please complete the math packet.
- **Students entering third grade:**
 - Reading: Please complete 2 out of the 5 book reports in the packet.
 - Math: Please complete the math packet.
- **Students entering fourth grade:**
 - Reading: Please complete ONE project from the "Reading Project Choices" list.
 - Math: Please complete the math packet.

Assignments are due to your child's 2019 – 2020 homeroom teacher by Tuesday, September 10, 2019. Have a great summer and read, learn, and have fun!

Sincerely,

Melissa N. Flach-Bammer
Principal

The Lincoln Park Elementary School will inspire and empower its children with opportunities that positively shape their lives and help them to become successful, life-long learners who possess the critical thinking, academic, and leadership skills required for the 21st Century.



Read a book of your choice. When finished, fill in the story elements with your neatest handwriting. Don't forget correct sentence structure!

Please return your completed work to your first grade teacher when you return to school in September.

Have fun!

Name: _____ Book Title: _____

Super Story Elements

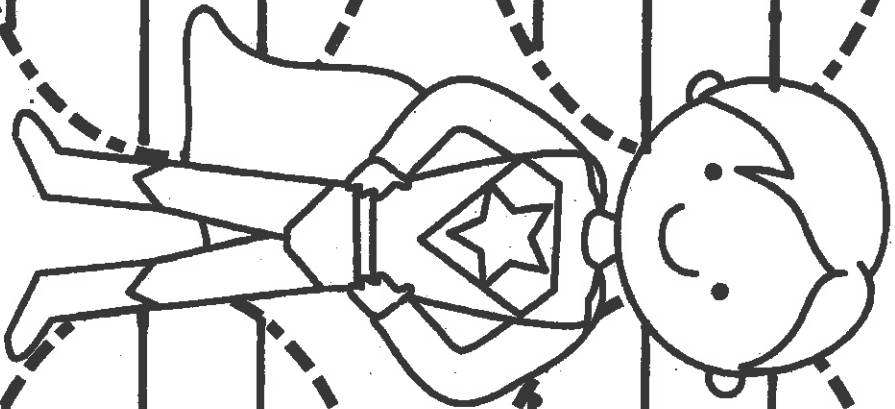
Theme:

Characters:

Setting:


Problem:

Solution:

























Summer Math Work

Please complete and hand in to your first grade teacher in September



Name _____

Fill in the missing number



Name _____

Number Words



one three six five
eight two four seven

© Annie Moffatt @ The Moffatt Girls 2014

number word: _____

number word: _____

number word: _____

number word: _____

number word: _____

number word: _____













number word: _____

number word: _____

Sunny Skip Counting


Name: _____

Count by 10s. Write the missing numbers.



Name: _____


Directions: Cut out the suns and use them to help you solve the addition problems.



Sunny Summer Addition

Up to 10

$\begin{array}{r} 7 \\ + 3 \\ \hline \end{array}$	$\begin{array}{r} 4 \\ + 2 \\ \hline \end{array}$	$\begin{array}{r} 9 \\ + 1 \\ \hline \end{array}$	$\begin{array}{r} 5 \\ + 5 \\ \hline \end{array}$
$\begin{array}{r} 3 \\ + 5 \\ \hline \end{array}$	$\begin{array}{r} 8 \\ + 2 \\ \hline \end{array}$	$\begin{array}{r} 5 \\ + 4 \\ \hline \end{array}$	$\begin{array}{r} 4 \\ + 4 \\ \hline \end{array}$
$\begin{array}{r} 6 \\ + 2 \\ \hline \end{array}$	$\begin{array}{r} 2 \\ + 7 \\ \hline \end{array}$	$\begin{array}{r} 6 \\ + 2 \\ \hline \end{array}$	$\begin{array}{r} 3 \\ + 4 \\ \hline \end{array}$



Flip Flop Facts

Name: _____

Solve the addition problems. Write your answer in the flip flops.

$$\begin{array}{r} 3 \\ + 1 \\ \hline \end{array}$$

$$\begin{array}{r} 2 \\ + 2 \\ \hline \end{array}$$

$$\begin{array}{r} 5 \\ + 0 \\ \hline \end{array}$$

$$\begin{array}{r} 4 \\ + 1 \\ \hline \end{array}$$

$$\begin{array}{r} 2 \\ + 1 \\ \hline \end{array}$$

$$\begin{array}{r} 1 \\ + 1 \\ \hline \end{array}$$

$$\begin{array}{r} 4 \\ + 0 \\ \hline \end{array}$$

$$\begin{array}{r} 3 \\ + 3 \\ \hline \end{array}$$

$$\begin{array}{r} 1 \\ + 2 \\ \hline \end{array}$$

$$\begin{array}{r} 0 \\ + 0 \\ \hline \end{array}$$

$$\begin{array}{r} 0 \\ + 5 \\ \hline \end{array}$$

$$\begin{array}{r} 2 \\ + 3 \\ \hline \end{array}$$

$$\begin{array}{r} 2 \\ + 0 \\ \hline \end{array}$$

$$\begin{array}{r} 1 \\ + 4 \\ \hline \end{array}$$

$$\begin{array}{r} 2 \\ + 0 \\ \hline \end{array}$$

$$\begin{array}{r} 3 \\ + 0 \\ \hline \end{array}$$

$$\begin{array}{r} 3 \\ + 2 \\ \hline \end{array}$$

$$\begin{array}{r} 0 \\ + 1 \\ \hline \end{array}$$


$$\begin{array}{r} 2 \\ + 2 \\ \hline \end{array}$$

$$\begin{array}{r} 1 \\ + 3 \\ \hline \end{array}$$

Name _____

Summer Time Subtraction

Directions: Add to find the difference.



$$\begin{array}{r} 7 \\ - 3 \\ \hline \end{array}$$

$$\begin{array}{r} 7 \\ - 6 \\ \hline \end{array}$$

$$\begin{array}{r} 5 \\ - 5 \\ \hline \end{array}$$

$$\begin{array}{r} 9 \\ - 3 \\ \hline \end{array}$$

$$\begin{array}{r} 8 \\ - 4 \\ \hline \end{array}$$

$$\begin{array}{r} 9 \\ - 6 \\ \hline \end{array}$$

$$\begin{array}{r} 6 \\ - 5 \\ \hline \end{array}$$

$$\begin{array}{r} 6 \\ - 4 \\ \hline \end{array}$$

$$\begin{array}{r} 7 \\ - 5 \\ \hline \end{array}$$

$$\begin{array}{r} 6 \\ - 3 \\ \hline \end{array}$$



Flip Flop Facts

Name: _____

Solve the subtraction problems. Write your answer in the flip flops.

